

**2 SEM TDC CHMH (CBCS) C 3**

**2 0 2 3**

( May/June )

**CHEMISTRY**

( Core )

Paper : C-3

( **Organic Chemistry** )

Full Marks : 53

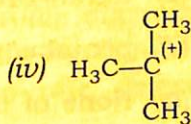
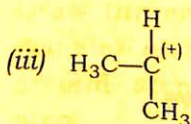
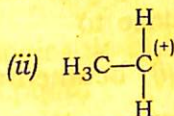
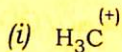
Pass Marks : 21

Time : 3 hours

*The figures in the margin indicate full marks  
for the questions*

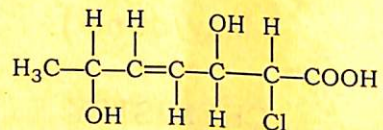
1. Choose the correct answer from the following : 1×5=5

(a) Which is the most stable carbocation among the following?



( 2 )

- (b) How many chiral carbons are present in the given molecule?



- (i) 1  
(ii) 2  
(iii) 3  
(iv) None of the above
- (c) The reagent used in Corey-House synthesis is
- (i)  $\text{R}_2\text{CuLi}$   
(ii)  $\text{Li}_2\text{CuCl}_4$   
(iii)  $\text{RCuLi}$   
(iv)  $\text{R}_2\text{CuLi}_2$
- (d) According to Baeyer's strain theory, cyclopentane is most stable cyclic compound because its bond angles are close to
- (i) octahedral  
(ii) tetrahedral  
(iii) pentahedral  
(iv) None of the above

( 3 )

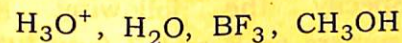
- (e) Which one of the following does not give isopropylbenzene as a product upon reaction with benzene?

- (i)  $(\text{CH}_3)_2\text{CHCl}/\text{AlCl}_3$   
(ii)  $\text{CH}_3\text{CH}_2\text{CH}_2\text{Cl}/\text{AlCl}_3$   
(iii)  $\text{CH}_3\text{CH}=\text{CH}_2/\text{H}_3\text{PO}_4$   
(iv)  $(\text{CH}_3)_2\text{C}=\text{CH}_2/\text{H}_3\text{PO}_4$

UNIT—I

2. Answer the following questions :  $2 \times 3 = 6$

- (a) Define electrophilic reagent and nucleophilic reagent. Select the electrophilic and nucleophilic reagent from the following :



- (b) Benzyl carbocation is more stable than propyl carbocation. Explain.

Or

$\text{CO}_2$  is a non-polar molecule but  $\text{SO}_2$  is a polar molecule. Explain.

- (c) Draw the energy profile diagram for a two-step endothermic reaction in which second step is the rate determining step.

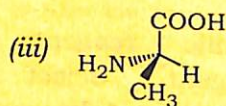
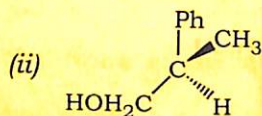
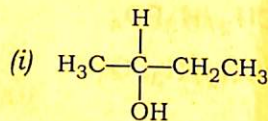


( 4 )

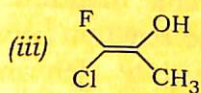
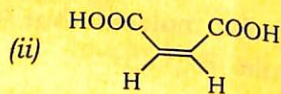
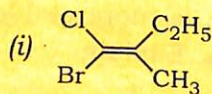
UNIT—II

3. Answer the following questions :  $2 \times 6 = 12$

(a) Specify the following stereoisomers as *R* and *S* (any two) :  $1 \times 2 = 2$



(b) Specify the following geometrical isomers as *E* and *Z* (any two) :  $1 \times 2 = 2$

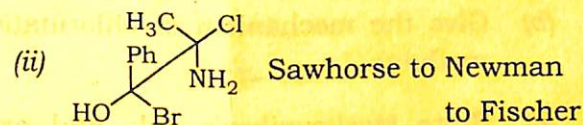
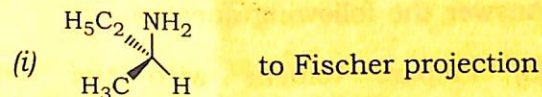


P23/913

( Continued )

( 5 )

(c) Interconvert the following projections as directed (any two) :  $1 \times 2 = 2$



(d) Explain why racemic tartaric acid can be resolved but not *meso*-tartaric acid. Give the chemical method of resolution. 2

(e) A 1.5 g of organic compound was dissolved in 10 ml of alcohol and placed the sample cell of 5 cm path length. The observed rotation of sodium *D*-line was  $1.21^\circ$ . Calculate the specific rotation of the compound. 2

(f) Describe the necessary conditions for a molecule to exhibit optical isomerism. 2

P23/913

( Turn Over )



( 6 )

UNIT—III

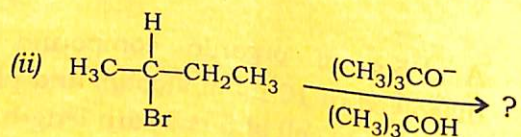
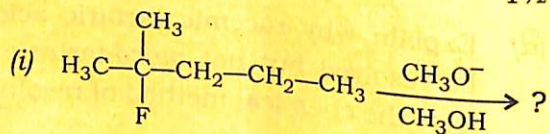
4. Answer the following questions :

(a) Prepare toluene with the help of Wurtz-Fittig reaction. 2

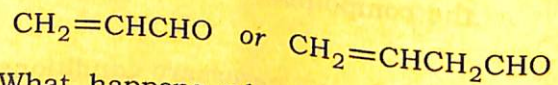
(b) Give the mechanism of chlorination of methane. 2

(c) State Markovnikov's rule and explain the mechanism of addition of HBr to propene in the presence of peroxide. 1+2=3

(d) Write the product(s) of the following elimination reactions : 1½×2=3



(e) Which dienophile is more reactive in Diels-Alder reaction? 2



(f) What happens when 1,3-butadiene is treated with HBr? 2

( 7 )

(g) How will you distinguish between 1-butyne and 2-butyne? 2

Or

Illustrate the mechanism of hydroboration-oxidation reaction.

UNIT—IV

5. (a) According to Baeyer's angle strain theory, cyclopentane is more stable than cyclohexane but practically cyclohexane is more stable. Explain. 2

(b) Draw the different conformations of *n*-butane (Newman projection formula) and show which one is most stable. 2

(c) How will you synthesize cyclopentane from diethyl adipate? 2

(d) Draw the energy profile diagram for the conformations of cyclohexane. 2

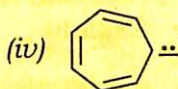
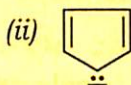
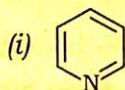
Or

Chair conformation of cyclohexane is more stable than boat conformation. Explain.



## UNIT—V

6. (a) Which of the following compounds are aromatic, anti-aromatic and non-aromatic? 2



- (b) Discuss the mechanism of sulphonation of benzene. 2

- (c) Explain why nitration of chlorobenzene gives *ortho*- and *para*-chloronitrobenzene but the chlorination of nitrobenzene gives *meta*-chlorobenzene. 2

\*\*\*